

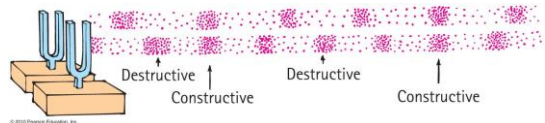
Note on Posted Slides

- These are the slides that I intended to show in class on Mon. Mar. 4, 2013.
- They contain important ideas and questions from your reading.
- Due to time constraints, I was probably not able to show all the slides during class.
- They are all posted here for completeness.

PHY205H1S Physics of Everyday Life

Class 14: **Sound**

- Sound in Air
- Media That Transmit Sound
- Reflection of Sound
- Refraction of Sound
- Energy in Sound Waves
- Resonance
- Interference
- Beats



Nature of Sound

Sound is a form of energy that exists whether or not it is heard.




[image from <http://thekunzlib.blogspot.ca/2012/04/20130002-2-see-fallen-forest.html>]

Origin of Sound

Most sounds are waves produced by the vibrations of matter.

Examples:

- In a piano, a violin, and a guitar, the sound is produced by a vibrating string; 
- in a saxophone, by a vibrating reed;
- in a flute, by a fluttering column of air at the mouthpiece;
- in your voice due to the vibration of your vocal chords.

[image from <http://home.cc.umanitoba.ca/~kruss/phonetics/acoustic/harmonics.html>]

Origin of Sound

- The original vibration stimulates the vibration of something larger or more massive, such as
 - the sounding board of a stringed instrument,
 - the air column within a reed or wind instrument, or
 - the air in the throat and mouth of a singer.
- This vibrating material then sends a disturbance through the surrounding medium, usually air, in the form of longitudinal sound waves.



[image from <http://umanitoba.ca/outreach/evolve/conservation/limbica9855>]

Frequency and Pitch

- The frequency of a sound wave is the same as the frequency of the vibrating source.
- The subjective impression about the frequency of sound is called **pitch**.



- The ear of a young person can normally hear pitches corresponding to the range of frequencies between about 20 and 20,000 Hertz.
- As we grow older, the limits of this human hearing range shrink, especially at the high-frequency end.

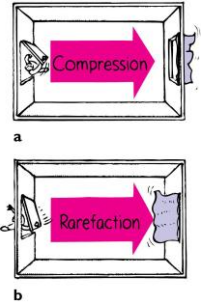
Infrasound and Ultrasound

- Sound waves with frequencies below 20 hertz are **infrasonic** (frequency too low for human hearing).
- Sound waves with frequencies above 20,000 hertz are called **ultrasonic** (frequency too high for human hearing).
- **We cannot hear infrasonic and ultrasonic sound.**



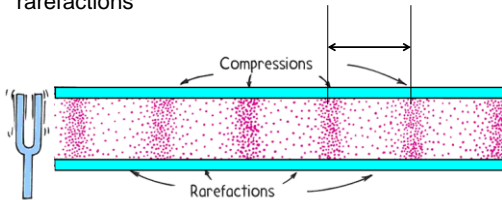
Compressions and Rarefactions

- Sound waves are vibrations made of compressions and rarefactions.
- In a **compression** region, the density and pressure are slightly **greater** than the average density and pressure
- In a **rarefaction** region, the density and pressure are slightly **lower** than the average density and pressure



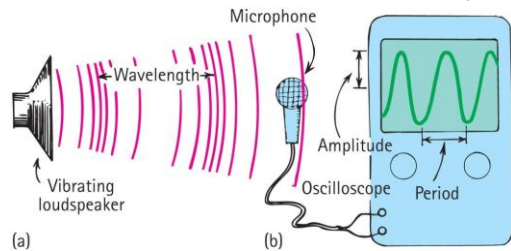
Wavelength of sound

- Distance between successive compressions or rarefactions



How sound is heard from a radio loudspeaker

- Radio loudspeaker is a paper cone that vibrates.
- Air molecules next to the loudspeaker set into vibration.
- Produces compressions and rarefactions traveling in air.
- Sound waves reach your ears, setting your eardrums into vibration. Or it reaches a microphone and sets up vibrations there, which are converted to an electric signal.



Media That Transmit Sound

- Any elastic substance — solid, liquid, gas, or plasma — can transmit sound.
- In liquids and solids, the atoms are relatively close together, respond quickly to one another's motions, and transmit energy with little loss.
- Sound travels about 4 times faster in water than in air and about 15 times faster in steel than in air.



Speed of Sound in Air

- Depends temperature, pressure and humidity
- Speed in 0°C dry air at sea level is about 330 m/s.
- In warm air faster than cold air.
 - Each degree rise in temperature above 0°C, speed of sound in air increases by 0.6 m/s



Speed of Sound in Air CHECK YOUR NEIGHBOR

You hear thunder 3 seconds after you see a lightning flash. How far away is the lightning?

- A. About 340 m
- B. About 660 m
- C. About 1 km
- D. More than 2 km
- D. There's no way to tell.



Image from <http://www.istockphoto.com/stock-photo-143155444/istockphoto-143155444>

Speed of Sound in Air

- Note that light travels almost instantaneously (300,000 km/s) and sound travels about 1/3 km/s.
- So if you count the number of seconds between seeing a flash and hearing the thunder, you can divide by 3 and get the distance to the storm in kilometres.



Image from <http://www.istockphoto.com/stock-photo-143155444/istockphoto-143155444>

Speed of Sound vs Speed of Light A situation to ponder...

- Consider a person attending a concert that is being broadcast over the radio.
- The person sits about 45 m from the stage and listens to the radio broadcast with a transistor radio over one ear and a nonbroadcast sound signal with the other ear.
- Further suppose that the radio signal must travel all the way around the world (40,000 km!) before reaching the ear.

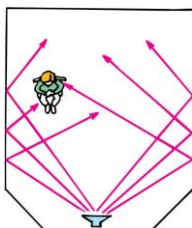
A situation to ponder... CHECK YOUR NEIGHBOR

Which signal will be heard first?

- A. Radio signal
- B. Nonbroadcast sound signal
- C. Both at the same time.
- D. None of the above.

Reflection of Sound

- Process in which sound encountering a surface is returned
- Often called an echo
- Multiple reflections—called reverberations




Reflection of Sound CHECK YOUR NEIGHBOR

Reverberations are best heard when you sing in a room with

- A. carpeted walls.
- B. hard-surfaced walls.
- C. open windows.
- D. None of the above.

Reflection of Sound

- Acoustics is the study of sound and architecture
- A concert hall aims for a balance between reverberation and absorption.
- Some have reflectors to direct sound



[images of the Sydney Opera House from <http://shedexpedition.com/sydney-opera-house/>]

Test on Wednesday during class time

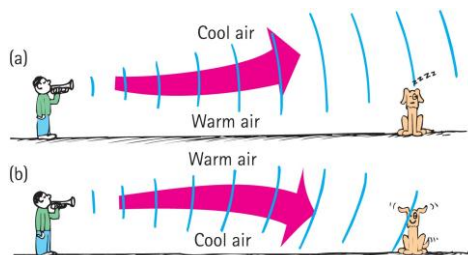
- **Location:** EX100, which is 255 McCaul St.
- Test will begin promptly at 10 minutes after the hour and will be 50 minutes long – if you can be there a bit early that would be great.
- Please bring a calculator, and, if you wish, a 3x5 notecard upon which you may write anything you wish on both sides
- Test will cover Hewitt chapters 12-16, 19 and 20, and will include:
 - 3 short-answer problems for which you must show your reasoning (4 points each)
 - 12 multiple choice questions (2 points each) – you fill in a bubble sheet
 - Questions will be similar in style and level to the Exercises and Problems at the end of the chapters in Hewitt

Tips for the 50 minute Test

- No phones / ipods etc allowed. You will need a regular calculator, and a watch could be handy as well!
- Time Management:
 - Skim over the entire test from front to back **before** you begin. Look for problems that you have confidence to solve first.
 - If you start a problem but can't finish it, leave it, make a mark on the edge of the paper beside it, and come back to it after you have solved all the easy problems.
- Bring your T-card or other photo ID, as we will be collecting signatures



Refraction of Sound



- Bending of waves—caused by changes in speed affected by temperature variations.

Refraction of Sound CHECK YOUR NEIGHBOR

When air near the ground on a warm day is warmed more than the air above, sound tends to bend

- upward.
- downward.
- at right angles to the ground.
- None of the above.

Refraction of Sound CHECK YOUR NEIGHBOR

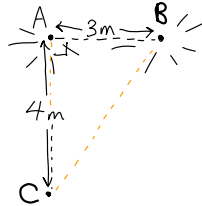
In the evening, when air directly above a pond is cooler than air above, sound across a pond tends to bend

- upward.
- downward.
- at right angles to the ground.
- None of the above.

Example

Two speakers, A and B, are "in phase" and emit a pure note with a wavelength 2 m. The speakers are side-by-side, 3 m apart. Point C is 4 m directly in front of speaker A.

Will a listener at point C hear constructive or destructive interference?

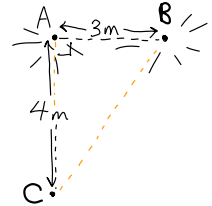


In Class Discussion Question

Two speakers, A and B, are "in phase" and emit a pure note with a wavelength 2 m. The speakers are side-by-side, 3 m apart. Point C is 4 m directly in front of speaker A.

How many wavelengths are between Speaker A and Point C?

- A. 0.5
- B. 1.0
- C. 1.5
- D. 2.0
- E. 2.5

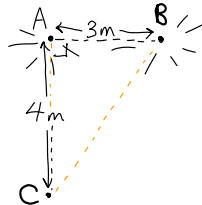


In Class Discussion Question

Two speakers, A and B, are "in phase" and emit a pure note with a wavelength 2 m. The speakers are side-by-side, 3 m apart. Point C is 4 m directly in front of speaker A.

How many wavelengths are between Speaker B and Point C?

- A. 0.5
- B. 1.0
- C. 1.5
- D. 2.0
- E. 2.5

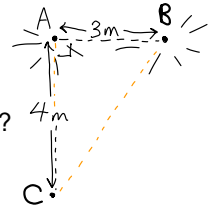


In Class Discussion Question

Two speakers, A and B, are "in phase" and emit a pure note with a wavelength 2 m. The speakers are side-by-side, 3 m apart. Point C is 4 m directly in front of speaker A.

At point C, what is the path difference between the sounds received from speakers A and B, as measured in wavelengths?

- A. 0.5
- B. 1.0
- C. 1.5
- D. 2.0
- E. 2.5

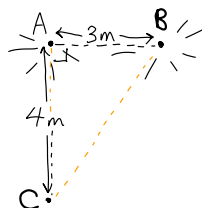


In Class Discussion Question

Two speakers, A and B, are "in phase" and emit a pure note with a wavelength 2 m. The speakers are side-by-side, 3 m apart. Point C is 4 m directly in front of speaker A.

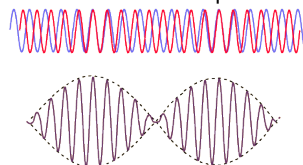
At point C, there will be

- A. Constructive interference (Amplitude at C = 2A)
- B. Destructive interference (Amplitude at C = zero)



Beats

- Periodic variations in the loudness of sound due to interference
- Occur when two waves of similar, but not equal frequencies are superposed.
- Provide a comparison of frequencies
- Frequency of beats is equal to the **difference** between the frequencies of the two waves.



[image from <http://hyperphysics.phy-astr.gsu.edu/hbase/sound/beat.html>]

Beats



- Applications
 - Piano tuning by listening to the disappearance of beats from a known frequency and a piano key
 - Tuning instruments in an orchestra by listening for beats between instruments and piano tone

Refraction of Sound CHECK YOUR NEIGHBOR

Suppose you sound a 1056-hertz tuning fork at the same time you strike a note on the piano and hear 2 beats/second. You tighten the piano string very slightly and now hear 3 beats/second. What is the frequency of the piano string?

- A. 1053 Hz
- B. 1056 Hz
- C. 1059 Hz
- D. Either A or C
- E. Either A, B or C

Refraction of Sound CHECK YOUR NEIGHBOR

Suppose you sound a 1056-hertz tuning fork at the same time you strike a note on the piano and hear 2 beats/second. What is the frequency of the piano string?

- A. 1054 Hz
- B. 1056 Hz
- C. 1058 Hz
- D. Either A or C
- E. Either A, B or C

Before class on Monday...

- Please read Chapter 21, or at least watch the 10-minute pre-class video for class 15.



- Something to think about:
- When you record the sound of music or a voice, what data is actually being stored in your computer? What is it about the sound that is being recorded?

