

Problem C

A fireworks rocket is fired vertically upward. At its maximum height of 80.0 m, it explodes and breaks into two pieces. The first piece has mass $m_1 = 1.40$ kg, and the second piece has mass $m_2 = 0.28$ kg. In the explosion, 860 J of chemical energy is converted to kinetic energy of the two fragments.

1. (4 points) What is the speed of each fragment just after the explosion?



Problem C

A fireworks rocket is fired vertically upward. At its maximum height of 80.0 m, it explodes and breaks into two pieces. The first piece has mass $m_1 = 1.40$ kg, and the second piece has mass $m_2 = 0.28$ kg. In the explosion, 860 J of chemical energy is converted to kinetic energy of the two fragments.

1. (4 points) What is the speed of each fragment just after the explosion?



Problem C

A fireworks rocket is fired vertically upward. At its maximum height of 80.0 m, it explodes and breaks into two pieces. The first piece has mass $m_1 = 1.40$ kg, and the second piece has mass $m_2 = 0.28$ kg. In the explosion, 860 J of chemical energy is converted to kinetic energy of the two fragments.

2. (2 points) It is observed that the two fragments hit the ground at the same time. What is the distance between the points on the ground where they land? [Assume that the ground is level and that $g = 9.80$ m/s² is a constant throughout the motion.]

Problem C

A fireworks rocket is fired vertically upward. At its maximum height of 80.0 m, it explodes and breaks into two pieces. The first piece has mass $m_1 = 1.40$ kg, and the second piece has mass $m_2 = 0.28$ kg. In the explosion, 860 J of chemical energy is converted to kinetic energy of the two fragments.

2. (2 points) It is observed that the two fragments hit the ground at the same time. What is the distance between the points on the ground where they land? [Assume that the ground is level and that $g = 9.80$ m/s² is a constant throughout the motion.]

Question 8

Two planets having equal masses are in circular orbit around a star. Planet A has a smaller orbital radius than planet B. Which statement is true? (Note that mechanical energy is defined as kinetic energy plus potential energy.)

- (A) Planet A has less potential energy than planet B, and both planets have the same amount of kinetic energy and mechanical energy.
- (B) Planet A has more kinetic energy, less potential energy, and less mechanical energy than planet B.
- (C) Planet A has more kinetic energy, more potential energy, and more mechanical energy than planet B.
- (D) Planet A has more kinetic energy and less potential energy than planet B, and both planets have the same amount of mechanical energy.
- (E) Planet A has more kinetic energy and more potential energy than planet B, and both planets have the same amount of mechanical energy.

Question 9

A hoop and a solid disk roll along the ground without slipping. They have the same velocity and the same radius. They both come to the same hill and roll up the hill without slipping. Which makes it further up the hill?

- (A) The hoop.
- (B) The disk.
- (C) They travel the same distance.
- (D) More information is needed to answer this question.

Question 8

A cube-shaped box is placed on a board. The board is tilted at an ever-increasing angle until the cube starts to move. What does the cube do first?

- (A) It starts slipping first. (B) It starts tipping first. (C) It slips and tips at the same time.
(D) More information is needed to answer this question.

Question 11

As you are leaving a building, the door opens outward. If the hinges on the door are on your right, what is the direction of the angular velocity vector of the door as you open it?

- (A) up (B) down (C) to your left (D) to your right (E) forwards

Question 7


A wheel is spinning in a horizontal circle, rotating counter-clockwise when viewed from above. It rotates around its centre of mass, so there is no precession due to gravity. You give the wheel a light tap downward, applied on its north-most side. Assume that the magnitude of the tap is small enough so that the magnitude of the angular velocity does not change. What is the direction of the wheel's angular velocity after your tap?

- (A) Down and east. (B) Down and west. (C) Up and east. (D) Up and west.
(E) None of the other answers are correct.

Question 3

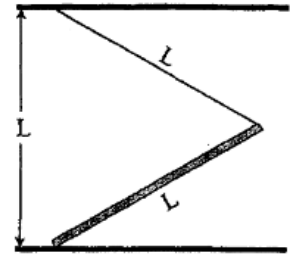
I place a heavy block at the 60-cm mark of a ruler which is 1-m long. I hold the ruler up by balancing it on my left finger at the 0-cm mark and my right finger at the 100-cm mark. Which finger exerts a larger force on the ruler?

- (A) Left finger. (B) Right finger.
(C) They exert the same force.
(D) More information is needed to answer this question.

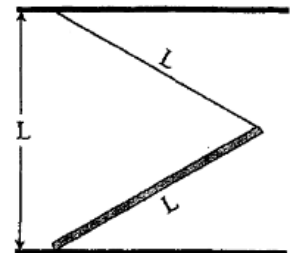


PROBLEM 2 [10 points]

A ladder (length L and mass M) is leaning to the right. One end rests on the ground, the other end is attached to a rope (length L and negligible mass). The other end of the rope is attached to the ceiling directly above the point where the ladder touches the ground (as shown below). If the height of the ceiling is also L , what is the minimum coefficient of static friction between the ladder and the floor for this to be stable?

**PROBLEM 2 [10 points]**

A ladder (length L and mass M) is leaning to the right. One end rests on the ground, the other end is attached to a rope (length L and negligible mass). The other end of the rope is attached to the ceiling directly above the point where the ladder touches the ground (as shown below). If the height of the ceiling is also L , what is the minimum coefficient of static friction between the ladder and the floor for this to be stable?



PROBLEM 1 [10 points]

A 2.000 ± 0.001 kg block is attached to a horizontal spring of spring constant 150 ± 5 N/m. The block is free to oscillate horizontally on a frictionless table, but can only move in the north-south directions. The mass is initially at rest when I give it a quick tap. If my tap imparts 35 ± 3 kg m/s of impulse to the block in the southward direction, what is the position of the mass 3.00 ± 0.01 seconds after the tap relative to its starting position?

PROBLEM 1 [10 points]

A 2.000 ± 0.001 kg block is attached to a horizontal spring of spring constant 150 ± 5 N/m. The block is free to oscillate horizontally on a frictionless table, but can only move in the north-south directions. The mass is initially at rest when I give it a quick tap. If my tap imparts 35 ± 3 kg m/s of impulse to the block in the southward direction, what is the position of the mass 3.00 ± 0.01 seconds after the tap relative to its starting position?